


Advantage - Theory (After p. 7)

Name: _____


Connect the musical symbol with the correct definition.



breath mark



bar line



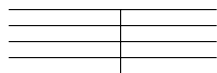
double bar line



bass clef



time signature




staff



treble clef



repeat sign



measure

Connect the notes and rests with their correct names.



quarter rest



whole note



quarter note



half note



half rest



whole rest